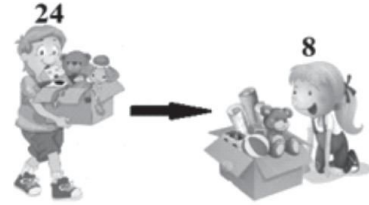



01. Manoj has 24 toys. He gave 8 toys to Rani. How many toys are left with Manoj?

- a. 15
- b. 16
- c. 18
- d. 20



02. Which of these is heavier than a  ?



03. Arrange the following numbers in ascending order?

2 tens 5 ones **3 tens 2 ones** **4 tens** **2 tens 4 ones**

- a. 2 tens 5 ones, 3 tens 2 ones, 4 tens, 2 tens 4 ones
- b. 4 tens, 3 tens 2 ones, 2 tens 4 ones, 2 tens 5 ones
- c. 2 tens 4 ones, 3 tens 2 ones, 2 tens 5 ones, 4 tens
- d. 2 tens 4 ones, 2 tens 5 ones, 3 tens 2 ones, 4 tens

04. How many petals will the next flower have?



- a. 10
- b. 9
- c. 6
- d. 7

05. Ruhi had 3 sweets. Mona gave her 5 more sweets. Now, how many sweets does Ruhi have?

- a. 9
- b. 10
- c. 8
- d. 6

06. There are 5 ones and 2 tens in.....

- a. 35
- b. 25
- c. 520
- d. 52

07. John had  dollars. He gave 5 dollars to the shopkeeper. How many dollars are left with him?



08. Which addition number sentence does this picture show?



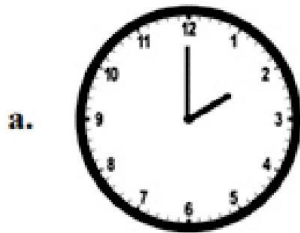
a. $2 + 3 = 5$

b. $1 + 2 = 3$


c. $2 + 2 = 4$

d. $1 + 1 = 2$


09. Which time shown is incorrect?




2 o'clock



9 o'clock



8 o'clock



4 o'clock

10. How much amount is shown below?



a. ₹55

b. ₹75

c. ₹65

d. ₹85

11. If 1 is 1 unit, then the given bat is how much units long?



a. 8 units

b. 9 units

c. 10 units

d. 7 units

12. Replace the question mark.

$? + 5 = 18 - 6$

a. 10

b. 7

c. 15

d. 19

13. If one pot costs ₹50. How much Asmi needs to pay for 2 pots?

a. ₹150

b. ₹59

c. ₹100

d. ₹159

14. Which month comes between September and November?

a. December

b. August

c. July


d. October

15. How many objects cost less than ₹86?



₹15

a. 4



₹82

b. 2



₹96



₹90

c. 1



₹65

d. 3

16. object looks like a cylinder.



a.



b.



c.



d.

ANSWER KEY

1 b	2 b	3 d	4 b	5 c	6 b	7 b	8 b
9 c	10 c	11 b	12 b	13 c	14 d	15 d	16 a